

Outline Maps—The United States

TABLE OF CONTENTS

PAGE	TITLE	CONCEPTS AND SKILLS
1	Name the States	State Identification
2	Which State Is It?	State Location
3	Grouping the States	Region Identification
4	What's That Water?	Lakes, Rivers, and Oceans
5	States and Rivers	Borders
6	Special Cities	State Capitals and the National Capital
7	Know Our Neighbors	The U.S. Border
8	The Western United States	The Pacific and Mountain States
9	The Central United States	The Plains and West South Central States
10	What's Up There?	The Heartland, Atlantic, and New England States
11	The Southeast	East South Central and Southern States
12	Numerous Neighbors	States with Many Neighboring States
13	As the Crow Flies	State Identification
14	Name That Range	Mountain Ranges
15	Special Sites	Parks, Monuments, and Memorials
16	People and Their Places	Population
17	People and Their Places (continued)	Population
18	Making Money	State Economies
19	Making Money (continued)	State Economies
20	United States Puzzle	State Shapes

The classroom teacher may reproduce the materials in this book for use in a single classroom only. The reproduction of any part of this book for other classrooms or for an entire school or school system is strictly prohibited. No part of this publication may be transmitted or recorded in any form without written permission from the publisher.

McDonald Publishing Co.
12621 Western Avenue
Garden Grove, CA 92841
www.teachercreated.com

R657 • ©1998 McDonald Publishing Co.
Reprinted 2022
ISBN: 978-1-55708-208-4
Printed in U.S.A.

Which State Is It?



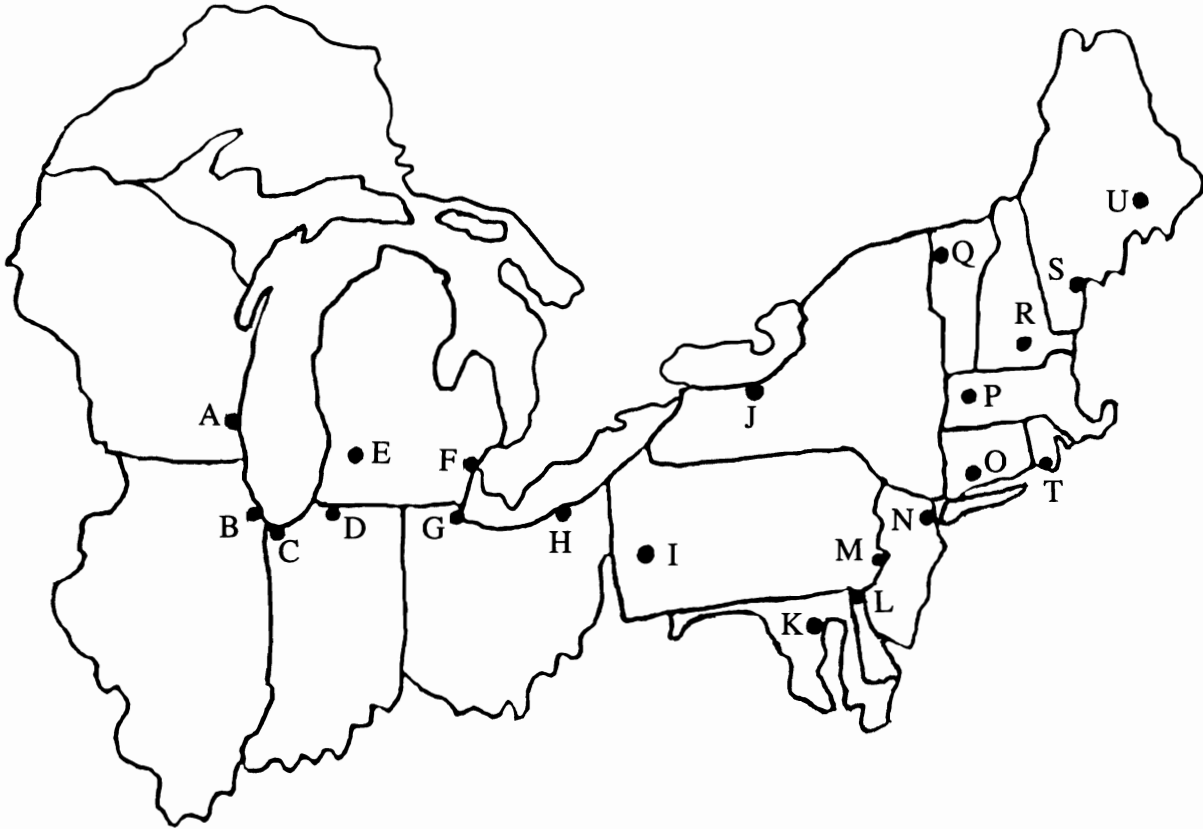
1. Write a blue X on the state just north of California.
2. Write a red X on the state between Oklahoma and Nebraska.
3. Write a green X on the state just east of Vermont.
4. Color all the states whose borders touch only two other states.
5. Circle the four states whose corners meet at the same point.
6. Label all the states you have marked.

Know Our Neighbors



1. Color the states that touch the border of Canada yellow. Label them.
2. Color the states that touch the border of Mexico blue. Label them.
3. Write an X on the states that form the coast of the Atlantic Ocean.
4. Which states touch the Pacific Ocean?
(Remember not all the states are shown on this map.)

What's Up There?

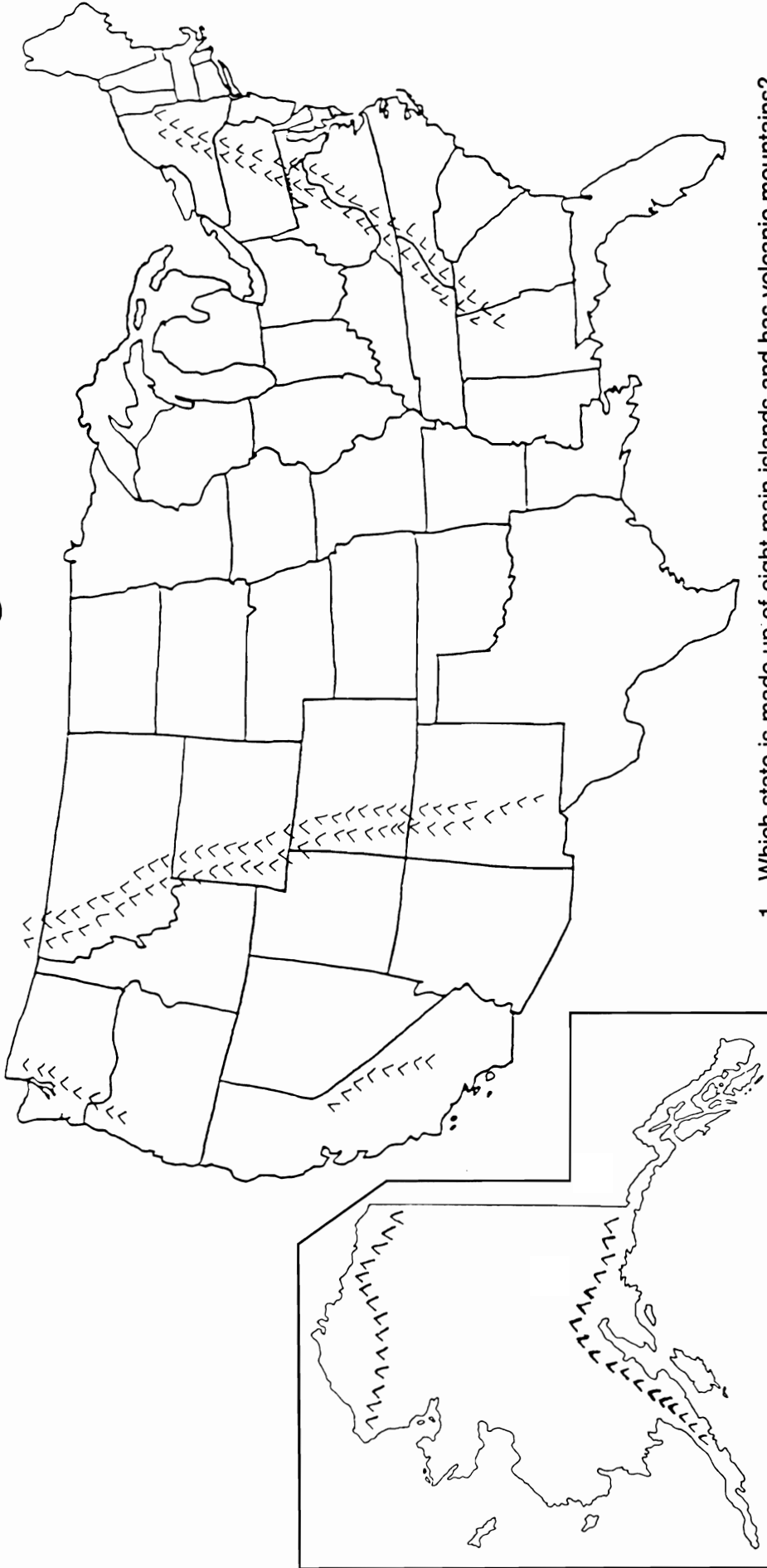


- Label each state shown on the map.
- Label each of the Great Lakes.
- Color the Heartland states blue.
- Color the Middle Atlantic states green.
- Color the New England states red.
- Locate each of these cities on the map. Write the correct letter on the line next to each city.

_____ Milwaukee	_____ Bangor	_____ Newark	_____ South Bend
_____ Gary	_____ Chicago	_____ Pittsfield	_____ Cleveland
_____ Kalamazoo	_____ Toledo	_____ Portland	_____ Baltimore
_____ Burlington	_____ Manchester	_____ Detroit	_____ Wilmington
_____ Rochester	_____ Newport	_____ Philadelphia	_____ New Haven
_____ Pittsburgh			
- What very large body of water borders this group of states to the east? _____

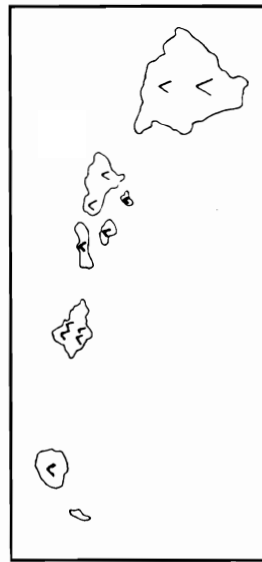
- Which state on the map is made up of two large pieces of land? _____
- Which of the Great Lakes does not touch Michigan's border? _____

Name That Range



1. Which state is made up of eight main islands and has volcanic mountains?

2. Label the mountain ranges shown on Alaska and on the contiguous United States.
3. Shade the mountain ranges tan. In which regions is much of the land mountainous?



4. Brainstorm other types of landforms.

