



# Math Activities

## Grade K

Pete's Baseball Patterns .....	2	Losing Groovy Buttons (Subtracting numbers 0–5) .....	29
Team Banana (Patterns) .....	3	Students on the Bus (Subtracting numbers 0–10) .....	30
New Guy Can Too! (Patterns) .....	4	Find Pete's Missing Sunglasses! (Subtracting numbers 0–10) .....	31
Missing in the Middle (Patterns) .....	5	Biggest Is Coolest! (Comparing objects: bigger/smaller) .....	32
Gone on Either Side (Patterns).....	6	Objects Big and Objects Small (Drawing objects: bigger/smaller) .....	33
Button Bonanza! (Tracing and writing numerals 1–5) .....	7	Rollin' Down the Longest Road (Comparing objects: longer/shorter) .....	34
Pete and His Friends Are Neat (Counting a sequence, 1–5) .....	8	Long Shoes, Short Shoes (Drawing objects: longer/ shorter) .....	35
Animal Roundup (Counting objects, 1–5) .....	9	Counting Down on the Farm (Counting objects in categories, 1–10) .....	36
Pete's Birthday Balloons (Tracing and writing numerals 6–10) .....	10	The Missing Pieces Mess (Drawing objects in categories, 1–10) .....	37
Party Countdown! (Counting a sequence, 6–10) ....	11	Pete's Category Contest! (Counting objects in categories, 11–19) .....	38
Pete Paints Lots of Fish (Counting objects, 6–10) ...	12	Stars and Suns (Drawing objects in categories, 11–19) .....	39
So Many Hearts! (Tracing and writing numerals 11–15) .....	13	Babies on the Farm (Place value: writing tens and ones) .....	40
Counting Candles (Counting objects, 11–15) .....	14	What Cool Shape Is This? (Identifying basic shapes) .....	41
Pete's Cool Clothes (Tracing and writing numerals 16–20) .....	15	Pete the Cat's Groovy Shapes (Identifying attributes of shapes) .....	42
Beach Counting (Counting a sequence, 16–20) .....	16	Amazing Shapes Maze (Identifying basic shapes) .....	43
Cats! Cats! Cats! (Counting objects, 16–20) .....	17	Definition Derby (Describing basic shapes) .....	44
Which Has More? (Comparing Numbers 1–10) .....	18	3-D Birthday Balloons (Identifying basic 3-D shapes) .....	45
Groovy Pets (Comparing numbers 1–10) .....	19	3-D Birthday Presents (Identifying real objects as 3-D shapes) .....	46
Balloons, More or Less! (Comparing numbers 1–10) .....	20	Where Are Pete's Friends? (Finding location on a grid) .....	47
Cool Cats Compare (Comparing numbers 1–10) .....	21	Answer Key .....	48
Get Pete to School on Time! (Comparing numbers 11–19) .....	22		
Pete's Picnic Path (Comparing numbers 11–19) .....	23		
Cool Cats at the Beach (Adding numbers 0–5) .....	24		
Munching on Addition (Adding numbers 0–5) .....	25		
Tasty Addition! (Adding numbers 0–10) .....	26		
Take Pete to the Ball Game! (Adding numbers 0–10) .....	27		
Farm Day Getaway (Subtracting numbers 1–5) .....	28		

The classroom teacher may reproduce the materials in this book for use in a single classroom only. The reproduction of any part of this book for other classrooms or for an entire school or school system is strictly prohibited. No part of this publication may be transmitted or recorded in any form without written permission from the publisher.


Edupress • 12621 Western Avenue • Garden Grove, CA 92841  
www.teachercreated.com

EP63512 • ©2016 Edupress • Reprinted 2018  
ISBN: 978-1-56472-374-1 • Printed in U.S.A.




# Gone on Either Side

**Directions:** What numbers are missing? Write the numbers that come before and after the middle number.



1.    ____ 3 ____	7.    ____ 11 ____
2.    ____ 6 ____	8.    ____ 4 ____
3.    ____ 2 ____	9.    ____ 7 ____
4.    ____ 10 ____	10.    ____ 12 ____
5.    ____ 5 ____	11.    ____ 15 ____
6.    ____ 8 ____	12.    ____ 18 ____





# Pete's Cool Clothes

**Directions:** Pete is cleaning out his closet. Help Pete count the clothes in each row below. Trace the number. Then write the number on the line.



1.



16

2.




17

3.



18


4.



19



# Which Has More?



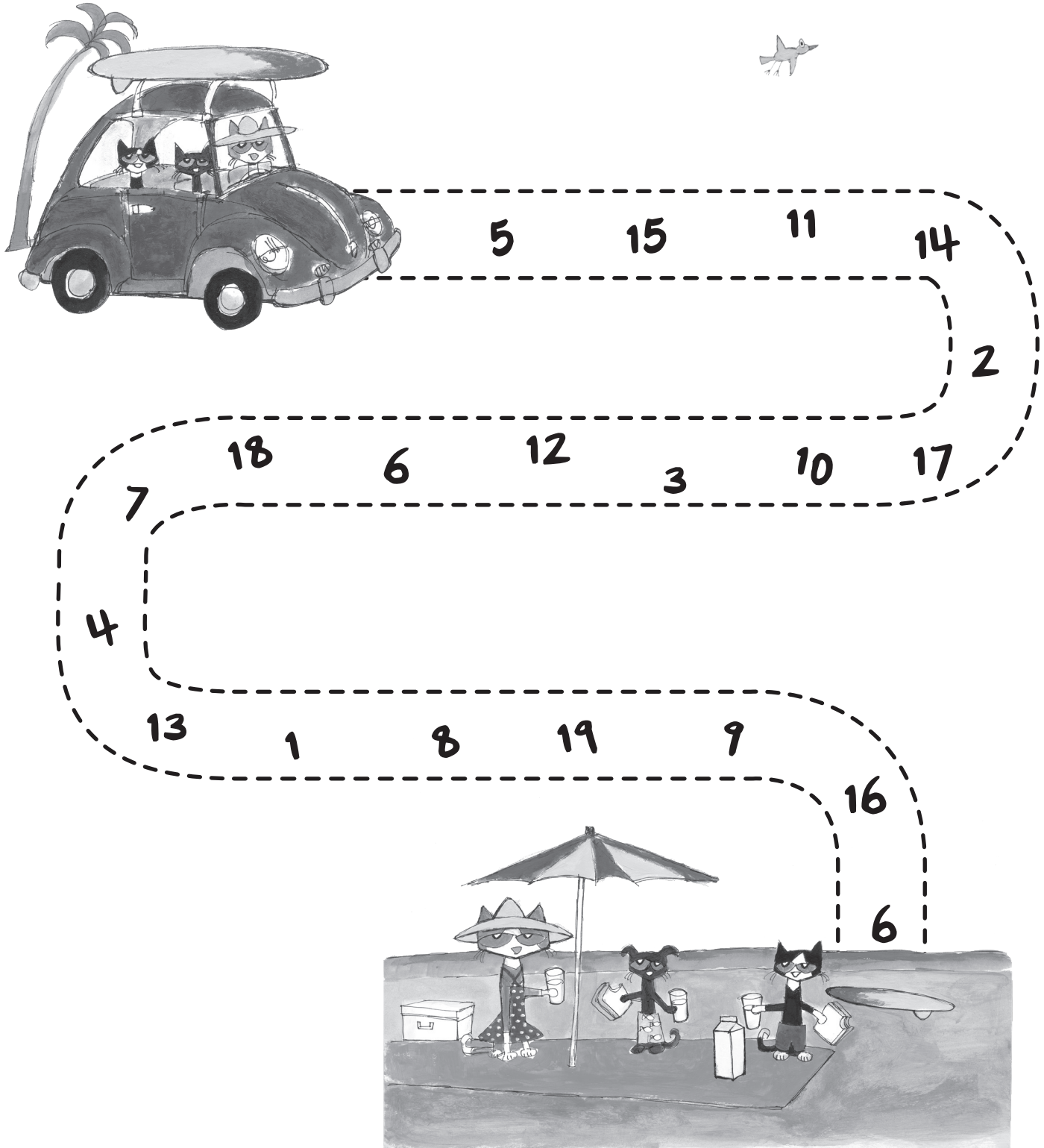
**Directions:** Pete and his friends are singing a song called “Which Has More?” For each row below, circle the group that has more things in it.

1.		
2.		
3.		
4.		
5.		
6.		
7.		
8.		



# Pete's Picnic Path

**Directions:** Follow the path to join Pete and his family at a picnic! Circle the numbers that are greater than 10.













# Definition Derby











**Directions:** Pete's friend Frog has entered a race. He must ride from each shape to its description. First, tell Frog what each shape looks like. Then help Frog by showing him the path from each shape to its description.

round      three      four      six      equal



- |    |   |                          |
|----|---|--------------------------|
| 1. |    | It has _____ sides.      |
| 2. |    | It is _____.             |
| 3. |   | It has _____ sides.      |
| 4. |  | It has _____ sides.      |
| 5. |  | It has four _____ sides. |

Draw a line from each shape to its description.

- |     |   |   |               |
|-----|---|---|---------------|
| 6.  |  |  | 6 sides       |
| 7.  |  |  | 3 sides       |
| 8.  |  |  | 4 equal sides |
| 9.  |  |  | round         |
| 10. |  |  | 4 sides       |