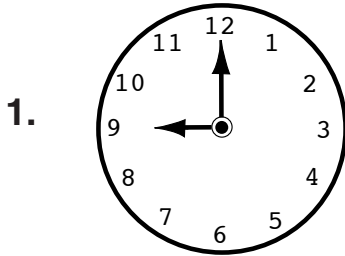


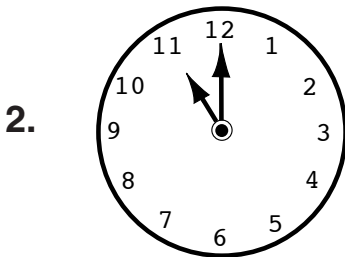


Time Match

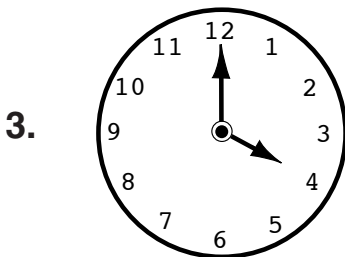
Directions: Draw a line to match each clock to the written times on the right.




11:00



4:00



9:00




7:30




Fall Back

Directions: Read the time on the first clock of each set and write it on the line. Make the time on the second clock show one hour *earlier* and write that time on the line.

Here is an example:




8 : 0 0




7 : 0 0

1.




: _____




: _____

2.




: _____




: _____

3.



: _____



: _____