






## Get Ready to Learn!

Get ready, get set, and go! Boost your child's learning with this exciting series of books. Geared to help children practice and master many needed skills, the *Ready•Set•Learn* books are bursting with 64 pages of learning fun. Use these books for . . .

 enrichment       skills reinforcement       extra practice

With their smaller size, the *Ready•Set•Learn* books fit easily in children's hands, backpacks, and book bags. All your child needs to get started are pencils, crayons, and colored pencils.

A full sheet of colorful stickers is included. Use these stickers for . . .

-  decorating pages
-  rewarding outstanding effort
-  keeping track of completed pages

Celebrate your child's progress by using these stickers on the reward chart located on the inside cover. The blue-ribbon sticker fits perfectly on the certificate on page 64.

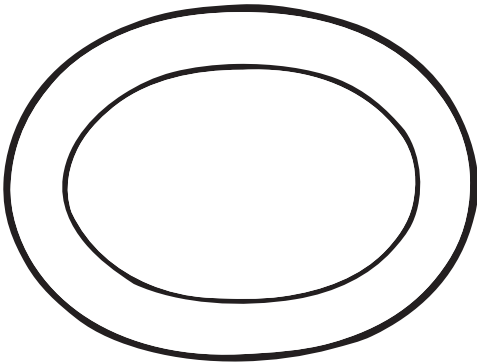
With *Ready•Set•Learn* and a little encouragement, your child will be on the fast track to learning fun!



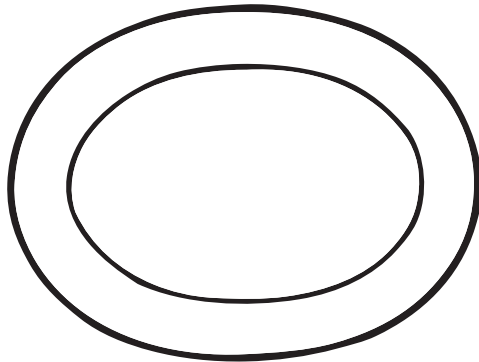
## Word Problems #29

**Directions:** Read the word problem. Then draw a picture on each plate to show how you solved the problem.

**My Plate**



**Dad's Plate**




At dinner, my family had a picnic. On my plate, I had 1 hot dog, 1 ear of corn, 12 baked beans, and 5 potato chips. On his plate, my dad had 2 hot dogs, 2 ears of corn, 14 baked beans, and no potato chips.

1. How many more hot dogs did my father have? \_\_\_\_\_
2. How many more potato chips did I have? \_\_\_\_\_
3. What was the sum of all the baked beans? \_\_\_\_\_



## Word Problems #30

**Directions:** Use the target board below to solve the problems.



1. Robin shot two arrows for a total of 5 points. The first arrow hit the 0. What was the other number that Robin hit?

Robin hit the \_\_\_\_\_.

2. Maid Marion shot two arrows for a total of 3 points. The first arrow hit the 2. What was the other number that Maid Marion hit?

Maid Marion hit the \_\_\_\_\_.

3. Little John shot two arrows for a total of 10 points. The first arrow hit the 5. What was the other number that Little John hit?

Little John hit the \_\_\_\_\_.

4. Friar Tuck shot two arrows for a total of 0 points. What were the two numbers that Friar Tuck hit?

Friar Tuck hit the \_\_\_\_\_ and the \_\_\_\_\_.



## Word Problems #31

**Directions:** Solve the problems below. Show your work in the space provided.

<p>1. Three children had a race at recess. Tony came in last. Sarah came in after Mark. Who came in first? Who came in second? Who came in third?</p> <p>_____</p>	<p><b>Show Your Work</b></p>
<p>2. Jose invited five children to his birthday party. He wants to give each child two balloons, including himself. How many balloons does Jose need to buy?</p> <p>_____</p>	<p><b>Show Your Work</b></p>
<p>3. Maurice is going to buy lunch at school on Tuesday. He will bring his lunch on all other school days. How many days must he pack his lunch?</p> <p>_____</p>	<p><b>Show Your Work</b></p>
<p>4. Brenda gets five cents for each bottle she recycles. How much money will she earn if she recycles 10 bottles?</p> <p>_____</p>	<p><b>Show Your Work</b></p>