

Table of Contents



Introduction	3
Up or Down?	4
Up and Down	5
Left and Right	6
Where Is It? (<i>left and right</i>)	7
Life at the Ritz (<i>ordinal numbers</i>)	8
Tower Living (<i>ordinal numbers</i>)	9
How to Get There (<i>ordinal numbers</i>)	10
Where Do They Live? (<i>ordinal numbers, left and right</i>)	11
Draw It! (<i>position</i>)	12
Inside and Outside (<i>position</i>)	13
Where Are My Toys? (<i>position</i>)	14
In a Line (<i>position</i>)	15
Everything in Its Place (<i>position</i>)	16
The Schoolhouse (<i>position</i>)	17
Sports Shop (<i>shortest route</i>)	18
Coloring Maps	19
North, South, East, and West	20
Old Mac's Farm (<i>directional signs</i>)	21
Be a Tourist (<i>directional signs</i>)	22
Around the Neighborhood (<i>directional signs</i>)	23
By the Pool (<i>directional signs and position</i>)	24
Giving Directions (<i>directional signs and left and right</i>)	25
Treasure Island Resort (<i>directional signs</i>)	26
Who's There? (<i>coordinate points</i>)	27
Where Are the Hats? (<i>coordinate points</i>)	28
Family Fun Park (<i>coordinate points</i>)	29
Find the Address (<i>coordinate points</i>)	30
Visiting Friends (<i>directional signs</i>)	31
The School Carnival (<i>distance</i>)	32
Out and About (<i>distance</i>)	33
Map It Out! (<i>reading a legend</i>)	34
Going Camping (<i>using a legend</i>)	35
On the Road (<i>reading a road map</i>)	36
At the Grocery Store (<i>other kinds of maps</i>)	37
About the Weather (<i>other kinds of maps</i>)	38
My Classroom (<i>creating a map</i>)	39
Test Practice Pages	40
Answer Sheet	46
Answer Key	47

Where Is It?




Write the direction **left** or **right**.




Spider



Butterfly



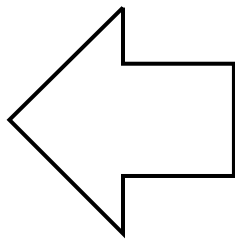
Bee



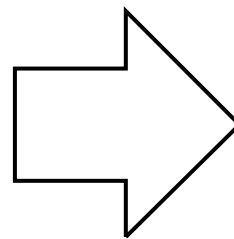
Ant



Snail







Left






Right

1. The  is to the _____ of the .

2. The  is to the _____ of the .

3. The  is to the _____ of the .


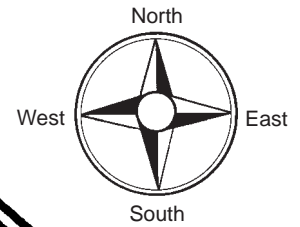
4. The  is to the _____ of the .

5. The  is to the _____ of the .

Around the Neighborhood



Use the map to answer the questions.




City Hall

Elm Street




School

Main Street



Gas Station

Elm Street



Park

1. Name the street that runs north and south. _____
2. Name the street that runs east and west. _____
3. On which side of Main Street is the school located? _____
4. On which side of Elm Street is the gas station located? _____
5. What is south of the school? _____
6. What is west of the park? _____