

Table of Contents

Introduction to Book	2
Introduction to Teacher’s Supplement	4
Math Practice Assignment Sheet Sets	5
Math Journal Review Question Sets	23
Answer Key (Teacher’s Supplement Section)	41
Classroom Tools	43
Student’s Problem Solving Math Journal	60
Counters/Manipulatives	251

Introduction to Book

Problem-Solving Math Journals for Primary Students is designed to develop logical and mathematical thinking skills in students and to cover the basic math concepts and skills presented in primary-level grades.

The Teacher’s Supplement provides Math Practice Assignment Sheet Sets, Math Journal Review Question Sets, and several reproducible pages in the Classroom Tools section for the students to use at home and/or at school.

The Math Practice Assignment Sheet Sets are a way to review/preview math skills at home. Each assignment sheet has 24 different math questions covering various skills and concepts. The questions cover basic math skills, as well as ask some challenging questions for the more capable students. The assignment sheets can be used as a homework supplement. They may be distributed at the beginning of each month, or you may wish to make each student his or her own packet of all the practice sheets.

The Math Journal Review Question Sets are designed to be used after some math concepts have been discussed and practiced. The review pages are just what their name implies—they review the math skills that were previously covered. The review pages provide a quick and easy way to assess the math strengths and weaknesses of each student.

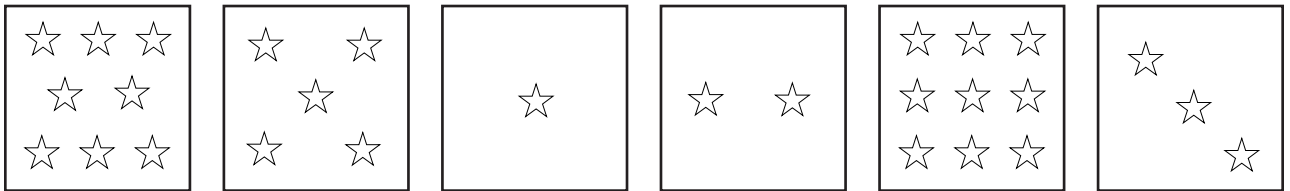
The Teacher’s Supplement also has a set of Classroom Tools (reproducible masters) for teachers to use in the classroom to assist students in solving the problems. These pages can be photocopied onto cardstock or construction paper and laminated or put in a plastic sleeve for durability, if desired. Make a set of these for the students to keep at school and another set to keep at home (if needed).

Math Journal Review Question Set #1


Name: _____ Date: _____

1. Write the numbers 0 to 10.

2. Count the number of stars in each box. Write the number on the line.




3. Write the addition sentence.



_____ + _____ = _____

4. Write the subtraction sentence.



_____ - _____ = _____

Name: _____

Date: _____


Warm Up

Count the number of legs. Write the number on the line.


A.



B.



C.




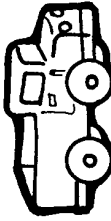


D.



Word Problem

E. Write the correct order of the objects below. Follow these rules.

- The cat is first.
- The sewing machine is third.
- The truck is last.



Math Problem: _____

Sentence: _____