

Table of Contents

Introduction	3	Measurement	117
Meeting Standards	4	Fractions	121
Language Arts		Shapes	123
Uppercase Letters	8	Patterns	126
Lowercase Letters	10	Graphs	128
Handwriting	12	Social Studies	
Sentences	13	Maps	130
Nouns	15	History	138
Verbs	20	Citizenship	143
Adjectives	23	Science	
Adverbs	27	Plants	148
Parts of Speech Review	29	Animals	151
Spelling	31	Weather	153
Vocabulary	34	Matter	158
Capitalization	38	Forces and Motion	161
Punctuation	41	Earth and the Universe	164
Reading Skills	53	Answer Key for Second Grade	168
Setting	57	Bonus Section	
Characters	59	Bonus Section Introduction	177
Main Idea	60	Common and Proper Nouns	178
Sequence	62	Connecting Words	179
Writing Process	66	What You Say	180
Math		Figurative Language	181
Problem Solving	76	Tongue Twisters	182
Counting	78	Cursive Sentences	183
Estimating	85	Another Way to End	184
Comparing	87	Adding with Decimals	185
Sequence	89	Subtracting with Decimals	186
Cardinals and Ordinals	91	Beginning Multiplication	187
Addition	93	Divine Division	188
Subtraction	98	See the Connection	189
Addition and Subtraction	102	Rounding Numbers	190
Time	105	Learning About Perimeter	191
Money	113	Answer Key for Bonus Section	192

Separate Items in a Series

Use commas to separate items in a series. There must be more than two items to need commas.

Examples

I like pizza and spaghetti. → No commas needed.

I like pizza, spaghetti, and lasagna. → Commas are needed.

Directions: Add commas as needed to each sentence. If a sentence does not need commas, write **C** for correct on the line provided.

_____ 1. She is nice sweet and pretty.

_____ 2. He is my best friend.

_____ 3. I have lived in Texas Utah and Virginia.

_____ 4. My favorite subjects are art math and music.

_____ 5. Are you going to invite Mark and Amanda?

_____ 6. My favorite numbers are three eight and nine.

_____ 7. The teacher asked us to bring our books our pencils and our papers.

_____ 8. James and Rusty are going to the party.

_____ 9. January February and March are very cold months.

_____ 10. I wish I could have a cat a dog and a hamster.



Double-Digit Subtraction Fun

Part 1

Directions: Solve the double-digit subtraction problems.

1. $\begin{array}{r} 39 \\ - 19 \\ \hline \end{array}$	2. $\begin{array}{r} 81 \\ - 30 \\ \hline \end{array}$	3. $\begin{array}{r} 75 \\ - 42 \\ \hline \end{array}$
4. $\begin{array}{r} 66 \\ - 32 \\ \hline \end{array}$	5. $\begin{array}{r} 28 \\ - 17 \\ \hline \end{array}$	6. $\begin{array}{r} 49 \\ - 22 \\ \hline \end{array}$
7. $\begin{array}{r} 99 \\ - 37 \\ \hline \end{array}$	8. $\begin{array}{r} 70 \\ - 60 \\ \hline \end{array}$	9. $\begin{array}{r} 18 \\ - 12 \\ \hline \end{array}$
10. $\begin{array}{r} 88 \\ - 41 \\ \hline \end{array}$	11. $\begin{array}{r} 31 \\ - 10 \\ \hline \end{array}$	12. $\begin{array}{r} 64 \\ - 24 \\ \hline \end{array}$

Part 2

Directions: Solve the word problem below.

Shelby invited 34 people to her party.
Before the party, 12 people told
Shelby they could not come.
How many people will be at
Shelby's party?



Show your work:

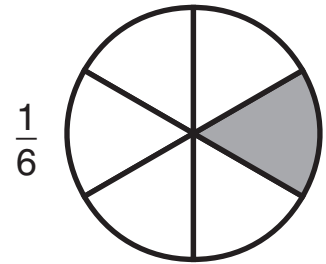
Answer: _____

A Fraction or a Part

A **fraction** is a section or part of something.

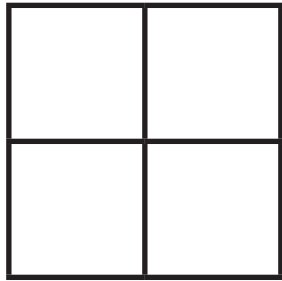
This circle is divided into six sections or parts.

If someone gives you one section of this circle, you will get $\frac{1}{6}$ of the circle. $\frac{1}{6}$ is a fraction, or a part of the circle.




Directions: Color the picture to show the fraction.


1. Color $\frac{1}{4}$ of the square.



2. Color $\frac{1}{2}$ of the square.



3. Color $\frac{1}{3}$ of the circle.



4. Color $\frac{2}{3}$ of the circle.



5. Color $\frac{3}{5}$ of the rectangle.



6. Color $\frac{1}{2}$ of the rectangle.



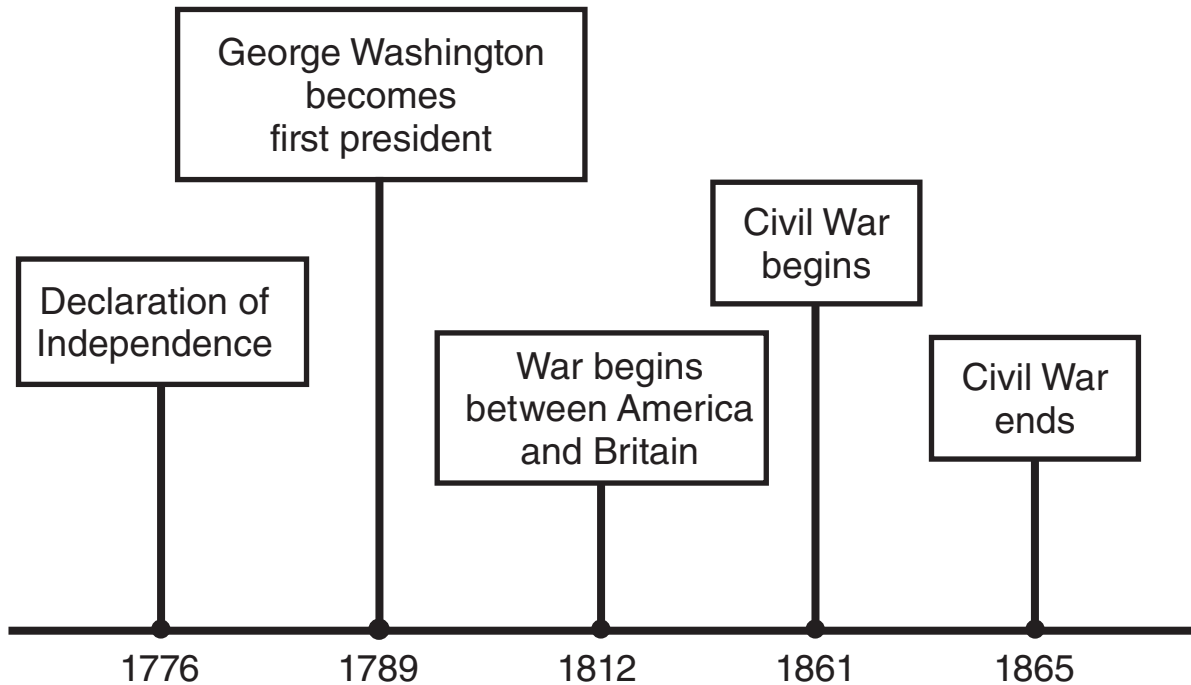
Something Extra: Draw a square. Divide the square into four equal parts. Color $\frac{3}{4}$ of the square.

Understanding a Time Line

A **time line** shows the order in which events occurred. Placing events in order by time is called chronological order.

Directions: Use the time line to answer the questions that follow.

Important American Historical Events



1. In what year did George Washington become president? _____
2. According to the time line, which happened first: the Civil War or the War of 1812? _____
3. What happened in the year 1865? _____
4. Who fought against America in the War of 1812? _____
5. In what year was the Declaration of Independence signed? _____
6. What happened first: the signing of the Declaration of Independence or George Washington becoming president? _____

