

Table of Contents

Introduction	3	Label These, Please	43
What Is a Map?	4	Types of Maps	44
Early Maps	5	Solar System	45
Early Maps Get Better	6	Continents And Oceans	46
The Parts of a Map	7	Swim or Walk?	47
Do You Know Your Directions?	8	Globes	48
North, South, East, or West?	9	The Equator and Hemispheres	49
Through the Squares	10	The Poles and Hemispheres	50
Directions Quiz	11	Which Slice of the World?	51
Which Way Should We Go?	12	Landforms	52
Direct Me, Sun!	13	Find One, Make One	53
Thanks, Sun!	14	What a Relief!	54
Direct Me, Stars!	15	Boundaries	55
Find the North Star!	16	North American Boundaries	56
More Directions!	17	Can You Find It?	57
The Compass Rose	18	By the Color!	58
Your Compass Rose	19, 20	In Mexico	59
What Is Where?	21	Your Boundaries!	60
Magnetic North	22	Grids	61
Where Am I?	23	On the Playgrounds	62
Symbols	24	In the City	63
Symbols on Maps	25	Across and Down	64
A Key	26	Road Maps	65
You Make the Key!	27	Drive Away!	66
Neighborhood Map	28	Product Maps	67
My Perfect Place	29	In Producta	68
Mapmaking	30	Weather Maps	69
Scale	31	Where Will It Rain?	70
How Many Miles?	32	Beneath City Streets	71
Choosing Your Scale	33	Population Map	72
Measurement	34	Treasure Map	73
Standard and Metric	35	From Words to Pictures	74
Vacation Time!	36	From Pictures to Words	75
How Far?	37	Ideas, Ideas, Ideas to Map!	76
A Trip to the Mountains	38	Grid Page	77
At the Playground	39	Answer Key	78
The Title	40	Answer Key	79
Tell Us More!	41	Answer Key	80
Labels	42		

You Make the Key!

Read the map on this page. Then draw the correct symbols next to each word in the key.




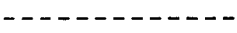








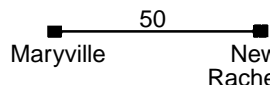
The map shows Grover City with several landmarks: Lincoln Airport (top left), Mc Donald Factory (top center), Northsouth Railroad (center, vertical line), Red Bluff River (center, winding line), Community Hospital (middle left, cross symbol), Lakeside Elementary School (bottom left, building symbol), and Stevenson Factory (bottom right, factory symbol). A lake is also shown at the bottom left.

Key	
	airport
	factory
	railroad
	hospital
	river
	school
	lake

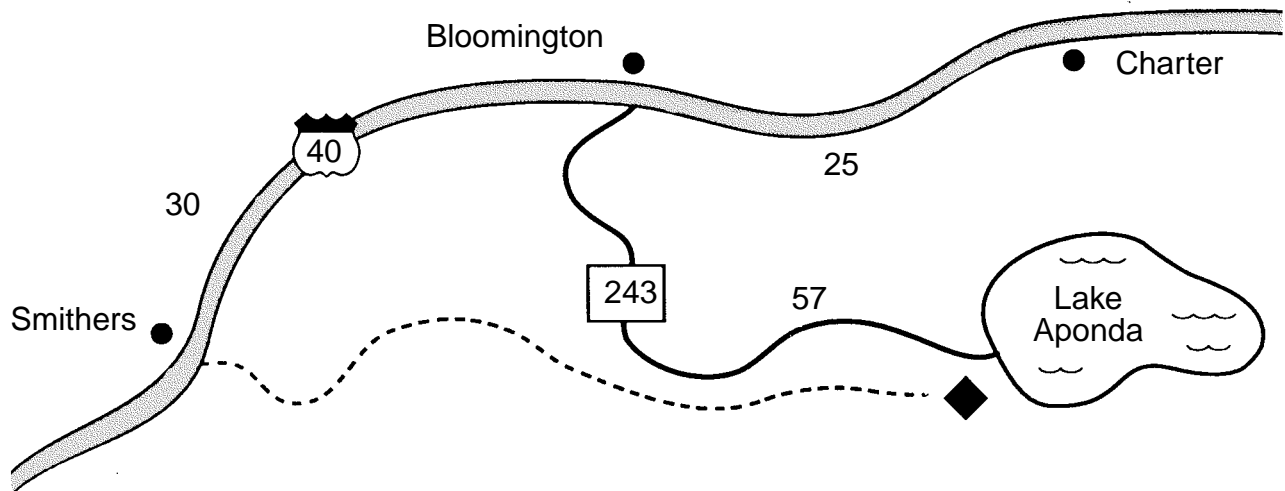
Road Maps

A *road map* helps people who drive get from place to place. *Road maps* show different types of roads, the distances from town to town, scenic routes, rest areas, and many other things.

Here are some symbols that are often used on road maps.

 highway	 road	 rest area
 scenic route	 capital	 city or town
 Interstate highway	 U.S. highway	 state highway
 Trans-Canada highway	 local road	
 Mexican highway	 distance between cities	

Read this map. Then answer the questions at the bottom of the page.



1. Interstate Highway 40 passes through what cities?
 _____, _____, and _____
2. What road leads from Bloomington to Lake Aponda? _____
3. How many miles is it from:
 Bloomington to Charter? _____
 Smithers to Bloomington? _____
 Bloomington to Lake Aponda? _____
4. A scenic route leads from the Lake Aponda rest area to what city?
